




Timester Challenge

Volume of a Cuboid



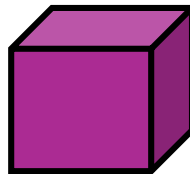
Calculate the volume.



$$\text{Cube} = 1\text{cm}^3$$

Bronze 

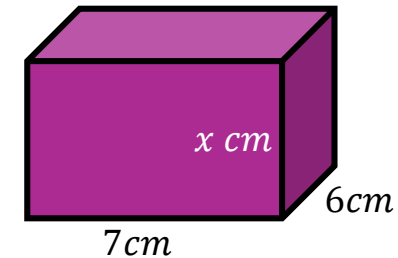
Calculate the volume of the cube.



4 cm

Silver 

Calculate the missing length when the volume is 168cm^3



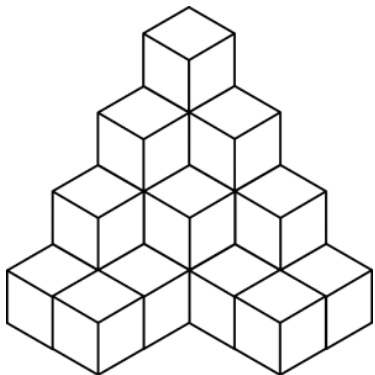
7 cm

6 cm

$x =$ _____

Gold 

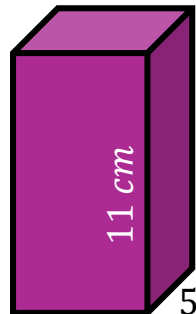
Calculate the volume.



$$\text{Cube} = 1\text{cm}^3$$

Bronze 

Calculate the volume of the cuboid.



4 cm

5 cm

Silver 