



A child left a plate of 15 cookies. Santa ate 4 and Rudolf ate 7. How many cookies went uneaten?

**NUMERACY4ALL**

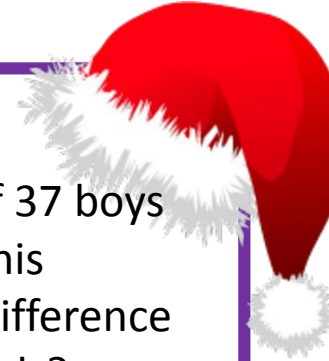
[www.missbsresources.com](http://www.missbsresources.com)



Santa has a queue of 37 boys and 41 girls outside his grotto. What is the difference between boys and girls?

**NUMERACY4ALL**

[www.missbsresources.com](http://www.missbsresources.com)



The Elves are making dolls. Each doll needs 2 shoes and 1 dress. They have 15 shoes and 16 dresses left. How many dolls can they make?

**NUMERACY4ALL**

[www.missbsresources.com](http://www.missbsresources.com)



Mrs Clause is baking cookies, each batch needs 300g of flour. She has 1.4kg of flour. How many batches can she make?

**NUMERACY4ALL**

[www.missbsresources.com](http://www.missbsresources.com)



\_\_\_\_\_ Calling Birds

**NUMERACY4ALL**

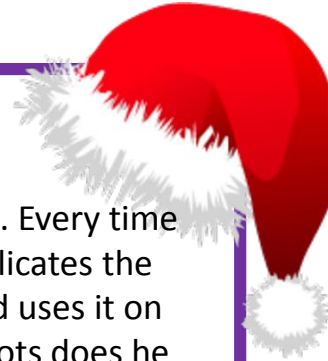
[www.missbsresources.com](http://www.missbsresources.com)



Rudolf has some magic dust. Every time he uses it on an item, it duplicates the item. He is really hungry and uses it on two carrots. How many carrots does he now have?

**NUMERACY4ALL**

[www.missbsresources.com](http://www.missbsresources.com)

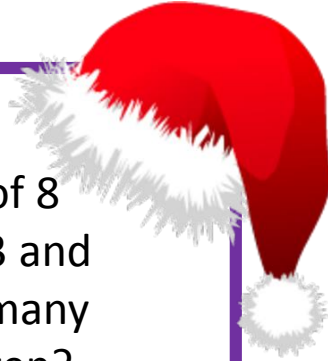




A child left a plate of 8 cookies. Santa ate 3 and Rudolf ate 2. How many cookies went uneaten?

**NUMERACY4ALL**

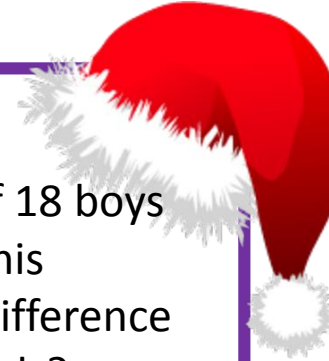
[www.missbsresources.com](http://www.missbsresources.com)



Santa has a queue of 18 boys and 15 girls outside his grotto. What is the difference between boys and girls?

**NUMERACY4ALL**

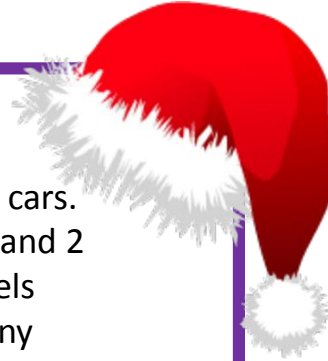
[www.missbsresources.com](http://www.missbsresources.com)



The Elves are making toy cars. Each car needs 4 wheels and 2 seats. They have 14 wheels and 8 seats left. How many cars can they make?

**NUMERACY4ALL**

[www.missbsresources.com](http://www.missbsresources.com)



Mrs Clause is baking cookies, each batch needs 400g of flour. She has 1.5kg of flour. How many batches can she make?

**NUMERACY4ALL**

[www.missbsresources.com](http://www.missbsresources.com)



\_\_\_\_\_ French Hens

**NUMERACY4ALL**

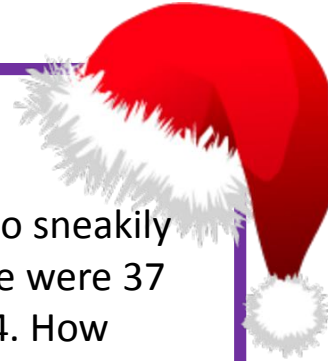
[www.missbsresources.com](http://www.missbsresources.com)



Rudolf has been known to sneakily eat carrots. In a bag there were 37 carrots, there are now 34. How many did Rudolf eat?

**NUMERACY4ALL**

[www.missbsresources.com](http://www.missbsresources.com)





A child left a plate of 12 cookies. Santa ate 4 and Rudolf ate 6. How many cookies went uneaten?

**NUMERACY4ALL**

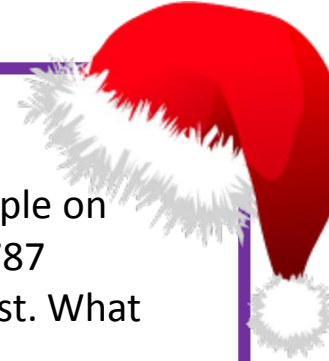
[www.missbsresources.com](http://www.missbsresources.com)



There are 1,235,789 people on the good list and 1,235,787 people on the naughty list. What is the difference?

**NUMERACY4ALL**

[www.missbsresources.com](http://www.missbsresources.com)



The Elves are making broom sticks. Each broom needs 2.5m of wood. The elves have 700cm of wood left. How many brooms can they make?

**NUMERACY4ALL**


[www.missbsresources.com](http://www.missbsresources.com)



Mrs Clause is making hot coco, each glass needs 80g of coco. She has 200g of coco. How many glasses can she make?

**NUMERACY4ALL**

[www.missbsresources.com](http://www.missbsresources.com)



\_\_\_\_\_ Turtle Doves

**NUMERACY4ALL**

[www.missbsresources.com](http://www.missbsresources.com)



The reindeer have been practising their flying skills. Comet flew 500m however Rudolf flew 250m. How many journeys would Rudolf have to make to reach Comets distance?

**NUMERACY4ALL**

[www.missbsresources.com](http://www.missbsresources.com)

