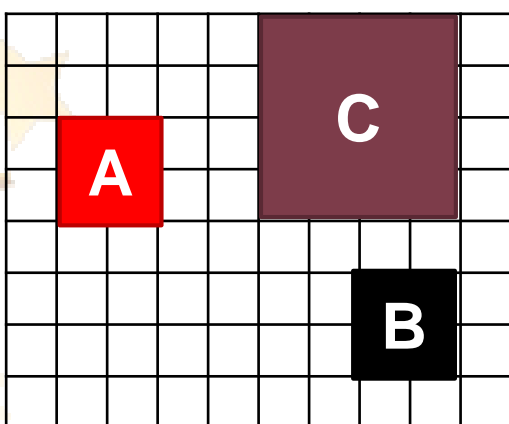


AGS Maths Stars




I set off from Acklam Grange School at 8:46am and arrive at the Riverside Stadium at 9:32am. How long did the journey take?

Describe the following transformations.




1) A to B

2) B to C



Draw a boxplot for the following information about the marks students scored on a test. The Maximum mark is 75 and the range is 25. The Lower Quartile is 58, with a median score 4 marks more. The Interquartile range is 10.



Make y the subject for the formula.

$$3y - p = h(2 + y)$$

