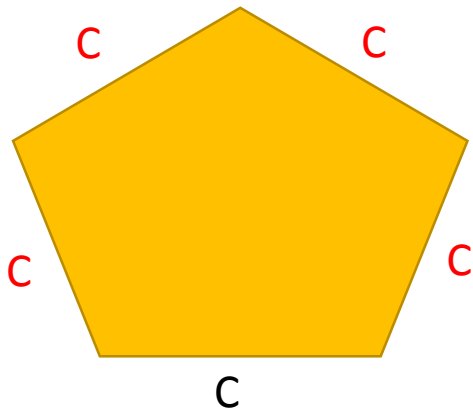


EXAM QUESTION DOHS



Write a formula for the perimeter of the regular shape.



$$C+C+C+C+C = 5C$$


$$P=5C$$

(2 mark)



Write a formula for the perimeter of these shapes.

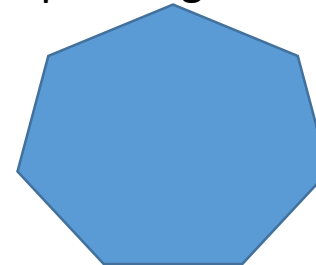
a) This shape is regular.



$$2a$$

(2 mark)

b) This shape is regular.



$$3b + 4$$

(2 mark)