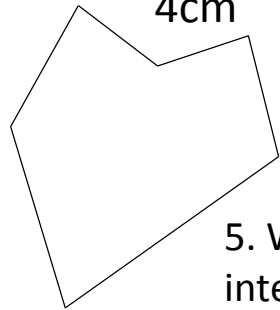
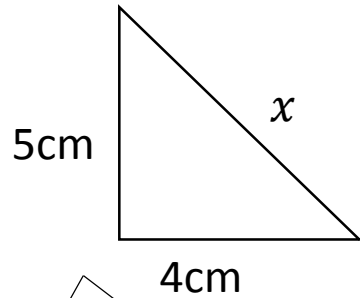


Quick Wits 3 - foundation

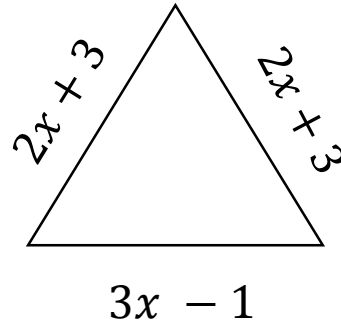
1) Find the length of missing side



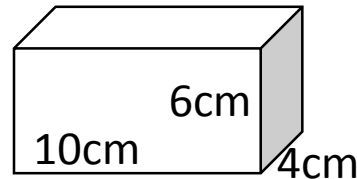
4. What is the name of this shape?

5. What is the sum of the interior angles?

2. What is the value of x if the perimeter is 33cm?



3. What type of triangle is this and why?



6. What is the name of this shape?

7. What is the volume of this shape?

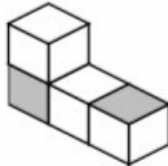
8. $y = 2x + 3$ Calculate y when $x = 5$

9. Solve the following equations a) $3x + 2 = 10$

b) $5x - 1 = 3x + 7$

c) $2(3x - 5) = 7$

10.

3D Object	Front Elevation	Side Elevation	Plan Elevation
	○ ○	○ ○	○ ○