
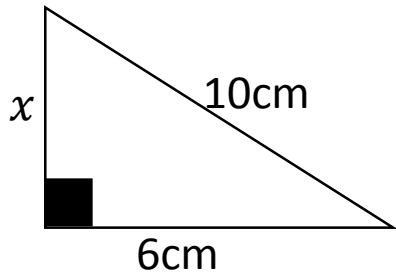


Quick Wits –Foundation 21

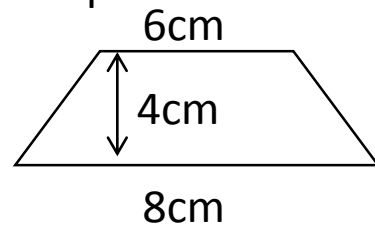


1. Find the missing angle y

2. Find the missing length.



3. What is the area of this shape?



4. Simplify the following.

- a) $f + f + f - f + f$
- b) $3a \times 2$
- c) $4b \times 5b$
- d) $2b \times 3e$

5. Find the mean, median, mode and range from this table.

Number of siblings	0	1	2	3
Frequency	5	3	8	4

Mean =

Mode =

Range =

6. Which of these nets will make cube.

