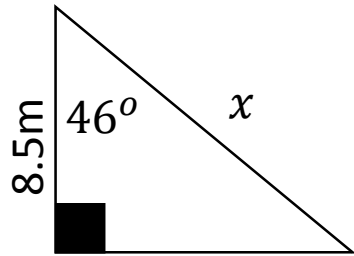
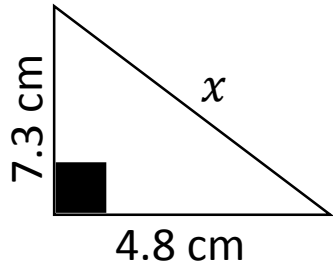
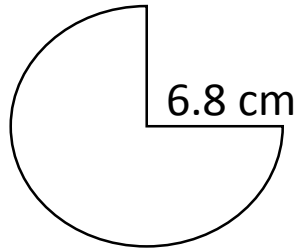
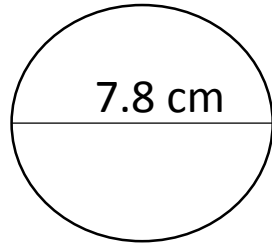


Find the missing length

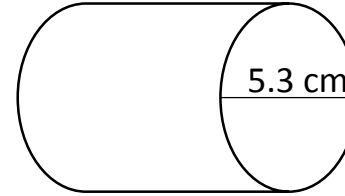


Find the area of the following shapes?

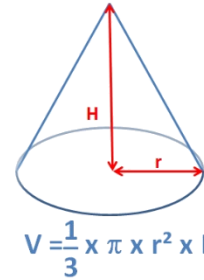


Quick Wits – Higher 14

What is the volume of the cylinder?



What is the Volume of the cone?



Height = 7cm

Radius = 4cm

Find an approximate value for x to 1 dp.

$$x^3 - 3x = 143$$

Time (mins)	Frequency	Midpoint	fx	CF
$1 < t \leq 3$	4			
$3 < t \leq 6$	3			
$6 < t \leq 10$	6			

Find the mean?

Find the median?

x	$x^3 - 3x$	Too big/ small