

Angles inside triangles

Literacy

Explain fully the links between the picture to angles.



Research

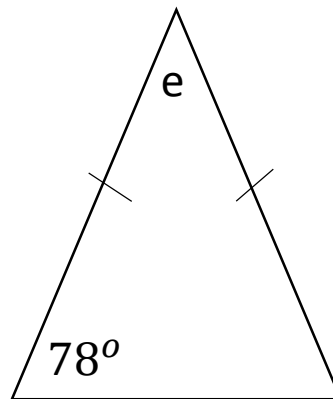
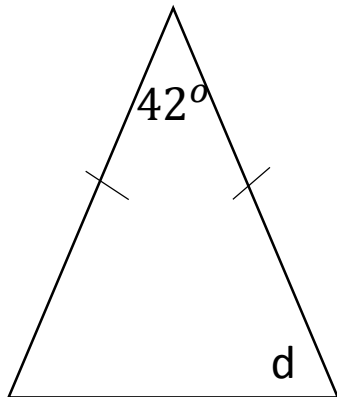
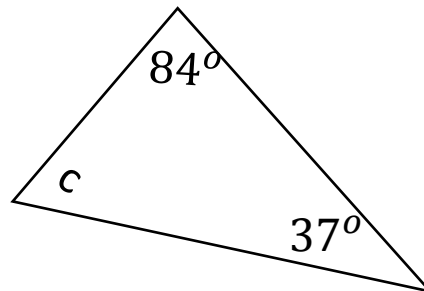
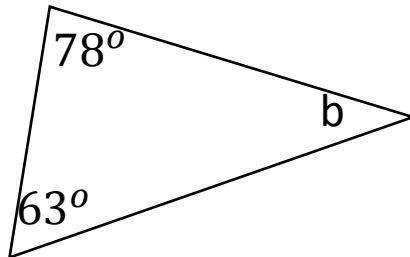
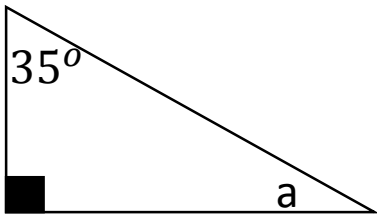
Why do angles inside triangles add up to make 180° .

Memory

Angles on a **inside** a triangle add up to make **180°** .

Two angles within an **isosceles** triangle are the **same** size.

Skill



Stretch

